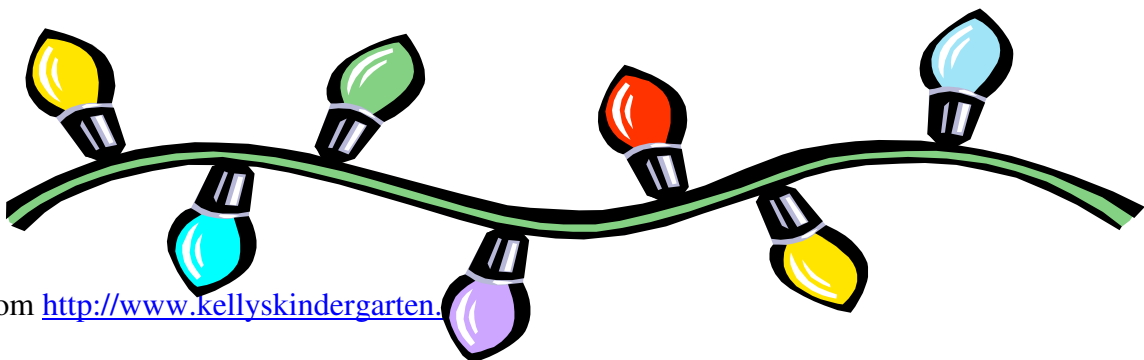


December Homework

| | Monday | Tuesday | Wednesday | Thursday |
|---------------|---|--|---|--|
| Week 1 | Complete the sentences using the words from the word bank. | Color the pictures that begin with "j" in red and the rest black. | Write a "j" word for each clue. Circle the numbers that are greater than 56. | Use the numbers to create a fact family. |
| Week 2 | Fill in the blanks with the words from the word bank. Use the math symbols $>$, $<$, $=$ to compare the numbers. | Circle the ending sound for each picture. Write your address. | List 5 words that contain the -en chunk and 5 words that contain the -et chunk. Write a complete sentence using as many of your chunk words as you can. | Write 2 sentences about the picture. |
| Week 3 | Can you find how many groups of tens and ones in each set? Write the number in the box. | Write 4 spelling words three times each. | Choose three spelling words and write a sentence for each. Make sure you have a capital and punctuation. | Write the total number of each group of objects underneath the picture. Then write the numbers in order from greatest to least on the right. |



Monday

Complete the sentences using words from the word bank:

A sentence should always start with a

_____.


A sentence should always have an _____ at the end of it.

Be sure and always use _____ when writing sentences.

Word Bank
ending mark
capital letter
finger spaces

Jj

Tuesday



Color the pictures that begin with Jj

Wednesday

An animal that begins with

A food that begins with

A month that begins with "j":

56 **9** **56** **28** **59** **67** **10** **7** **65**

Circle the numbers that are GREATER than 56.

Thursday

Use the given numbers to create a Fact Family.

2,5,7

| | |
|--|--|
| | |
|--|--|

| | |
|--|--|
| | |
|--|--|

Monday

You have been learning about forces in science. Fill in the missing blanks for each sentence.

A _____ is a push or a pull.

When you _____ something, you press it away.

When you _____ something, you tug it closer.

Word Bank

push

pull

force

Use the math symbols $>$, $<$, or $=$ to compare the numbers.

$>$ greater than, $<$ less than, $=$ equals

| | |
|----|----|
| 21 | 36 |
|----|----|

| | |
|----|----|
| 82 | 41 |
|----|----|

| | |
|----|----|
| 24 | 31 |
|----|----|


| | |
|----|----|
| 12 | 10 |
|----|----|

| | |
|----|----|
| 57 | 12 |
|----|----|

| | |
|----|----|
| 11 | 99 |
|----|----|

| | |
|----|----|
| 71 | 66 |
|----|----|

| | |
|----|----|
| 33 | 51 |
|----|----|



s p m d



n p r d

Tuesday



t n f p



k p z t



c x t f



h g m



s l f d



l b c d



s m b h



s v g r

My address is

Wednesday

List 5 words that contain the -en chunk and 5 words that contain the -et chunk. Write a complete sentence using as many of your chunk words as you can.

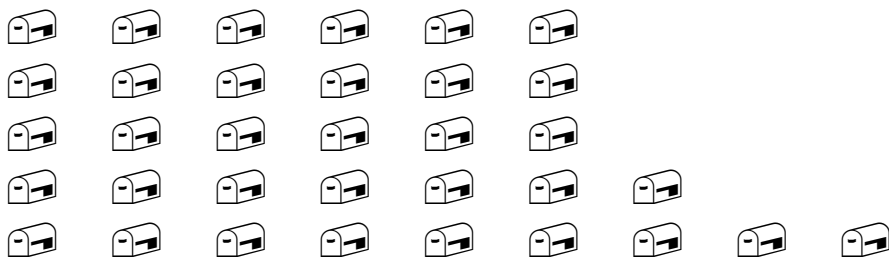


Thursday


Handwriting practice lines consisting of two sets of three horizontal lines each. Each set includes a solid top line, a dashed middle line, and a solid bottom line.

Monday

Can you find how many groups of tens and ones in each set? Write the number in the box.



A large empty rectangular box for writing the answer to the first problem.

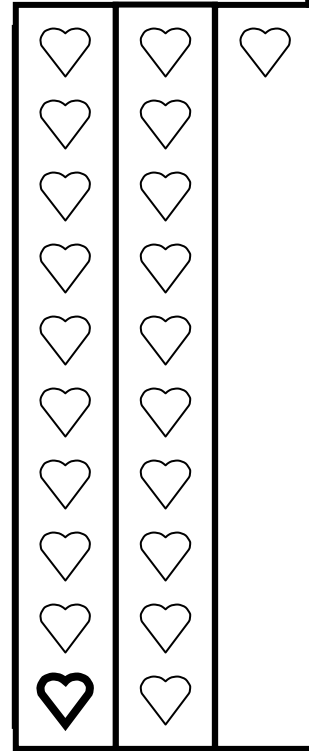




A large empty rectangular box for writing the answer to the second problem.

Tuesday

Wednesday

Thursday



Greatest

Least