


# May Homework



	Monday	Tuesday	Wednesday	Thursday
<p><b><u>Week 1</u></b> <b><u>Sight Words</u></b> did but about out</p> <p><b><u>Spelling Rime</u></b> -ar, -ed</p>	<p>Use a red pen and correct the sentences.</p> <p>Read 10 minutes</p>	<p>Fill in the blanks with the correct answers. Draw three things that are living.</p> <p>Read 10 minutes</p>	<p>Read the sentences. Fill in the missing sight words. Write a sentence for each sight word in the box.</p> <p>Read 10 minutes</p>	<p>Answer the questions and circle the correct answer.</p> <p>Read 10 minutes</p>
<p><b><u>Week 2</u></b> <b><u>Sight Words</u></b> saw said play boy</p> <p><b><u>Spelling Rime</u></b> -ie, tr-</p>	<p>Solve the problems using UPS check. Explain to your parents how you solved them.</p> <p>Read 10 minutes</p>	<p>Circle the words in the word search.</p> <p>Read 10 minutes</p>	<p>Label the parts of the plant. Which part takes in water?</p> <p>Read 10 minutes</p>	<p>Solve the addition problems.</p> <p>Read 10 minutes</p>
<p><b><u>Week 3</u></b> <b><u>Sight Words</u></b> they were girl off</p> <p><b><u>Spelling Rime</u></b> qu-, compounds</p>	<p>Put the pictures of the plant life cycle in order. Write the numbers in the blanks.</p> <p>Compare the numbers and fill in the symbols &gt;, &lt;, =.</p> <p>Read 10 minutes</p>	<p>Write the sight words three times in each in different colors.</p> <p>Read 10 minutes</p>	<p>Solve the addition problems. Color the picture according to the key.</p> <p>Read 10 minutes</p>	<p>Use a red pen and correct the sentences.</p> <p>Read 10 minutes</p>
<p><b><u>Week 4</u></b> No Spelling</p>	<p>Circle combinations of 6.</p> <p>Read 10 minutes</p>	<p>Write about what you look forward to in 2<sup>nd</sup> grade.</p> <p>Read 10 minutes</p>	<p>Solve the number sentences.</p> <p>Read 10 minutes</p>	<p>Solve the problems using UPS check. Explain to your parents how you solved the problems.</p> <p>Read 10 minutes</p>

Monday

1. i went to tha store With me mom
2. u lik summer because there is no School
3. my mom is excited for mother's Day
4. The best Part uv first grade is the ocean's unit.
5. i like to go to the movies games and school

Tuesday

Living things need \_\_\_\_\_ , \_\_\_\_\_ , and \_\_\_\_\_ to survive.

\_\_\_\_\_ is a living thing.

\_\_\_\_\_ is a nonliving thing.

\*Draw three things that are living:

did but about out

Wednesday

I \_\_\_\_\_ get a gift for my mom. You can go, \_\_\_\_\_ not now.

Please look \_\_\_\_\_ the window. We will learn \_\_\_\_\_ plants.

Write a sentence for each sight word in the box.

-----

-----

-----

-----

-----

-----

-----

-----

-----

-----


Which picture would you use the greatest units of to measure the length of your bed?

Thursday

A.



B.



Which picture would you use the least number of units of to measure the length of your front yard?

A.

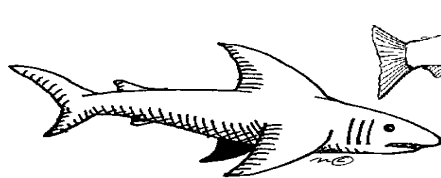


B.

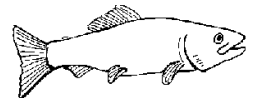


Which picture would you predict has the greatest mass?

A.



B.



Which picture would you predict has the least mass?

A.



B.




Which object covers the least area?

A.




B.



C.



D.



# Monday

Kimberly enjoys making bracelets. She is making 7 bracelets for her friends. If each bracelet needs 10 beads. How many beads will Kimberly need to make the bracelets?


June read 18 chapter books over the summer. Lucy read 12 chapter books. How many more books did June read than Lucy?

# Tuesday

y o t d m  
o u h i a  
b y s a w  
i h c s d  
d i d l b  
t u o b a

did  
but  
about  
said  
saw  
boy

Label the Parts of a Plant



Word Bank  
stem  
roots  
flower  
leaves

Wednesday

What part of the plant takes in the water?

Plants make their own....

Thursday

$3+3=$  \_\_\_     $4+4=$  \_\_\_     $4+6=$  \_\_\_     $8+4=$  \_\_\_

$5+8=$  \_\_\_     $6+6=$  \_\_\_     $6+7=$  \_\_\_     $3+6=$  \_\_\_

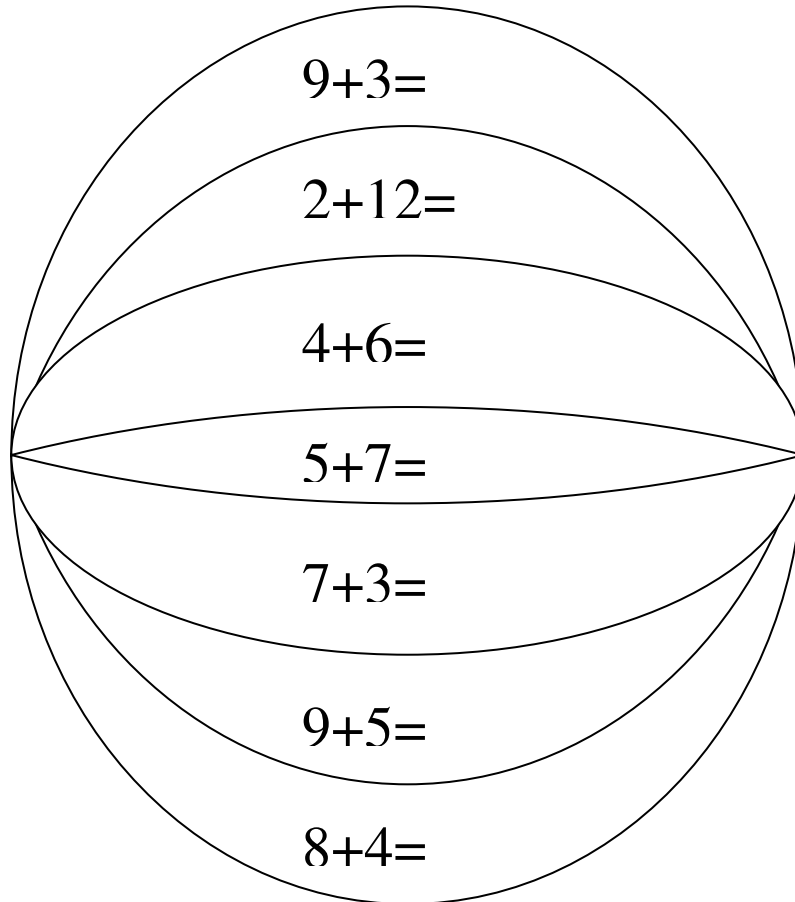
$1+11=$  \_\_\_     $2+9=$  \_\_\_     $7+4=$  \_\_\_     $1+12=$  \_\_\_

$0+10=$  \_\_\_     $7+7=$  \_\_\_     $8+7=$  \_\_\_     $5+6=$  \_\_\_

$9+5=$  \_\_\_     $6+8=$  \_\_\_     $9+9=$  \_\_\_     $10+5=$  \_\_\_



Wednesday



Color  
the  
spaces  
as  
follows:

12-red  
14-blue  
10-  
yellow

Thursday

1. you are almost a Second Grader
2. we went to the house after School
3. the game wuz a lot of Fun?
4. the water was cold in the pool
5. i am going to tha beach pool and six flags  
this summer



Wednesday

$9+3= \underline{\quad}$     $6+4= \underline{\quad}$     $7+6= \underline{\quad}$     $3+4= \underline{\quad}$

$5+9= \underline{\quad}$     $6+8= \underline{\quad}$     $6+10= \underline{\quad}$     $3+5= \underline{\quad}$

$1+13= \underline{\quad}$     $2+4= \underline{\quad}$     $7+5= \underline{\quad}$     $5+14= \underline{\quad}$

$10+10= \underline{\quad}$     $7+7= \underline{\quad}$     $4+7= \underline{\quad}$     $5+7= \underline{\quad}$

$9+2= \underline{\quad}$     $6+9= \underline{\quad}$     $9+9= \underline{\quad}$     $13+3= \underline{\quad}$

Natalia had a bag of 48 gummy bears. If she eats 8 a day. How many days will it take her to eat the bag of gummy bears?

Thursday

Crystal and Holly made puppets. The girls glued 2 eyes on each puppet. They used 22 eyes in all. How many puppets did the girls make?