






February Homework



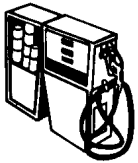
	Monday	Tuesday	Wednesday	Thursday
<p>Week 1 <u>Sight Words</u> up so by be</p> <p><u>Spelling Rime</u> <u>Pattern</u> -ell and -est</p>	<p>Write and draw the three body of waters we talked about in Science (hint....stream, lakes, and ocean)</p> <p>Write the sight words for this week.</p>	<p>Write the words. Circle the vowels.</p> <p>Draw tally marks to show how many of each vowel.</p>	<p>Solve the problem using UPS check. Explain to your parents how you solved the problem.</p>	<p>Choose three spelling words and write a sentence for each. Make sure you have a capital and punctuation.</p>
<p>Week 2 <u>Sight Words</u> with on each went here</p> <p><u>Spelling Rime</u> <u>Pattern</u> -id and -all</p>	<p>Write the total number of each group of objects underneath the picture. Then write the numbers in order from greatest to least on the right.</p>	<p>Write 4 spelling words three times each. Use a different color each time.</p>	<p>Correct the sentences and rewrite them correctly.</p>	<p>Solve the number sentences. Find the missing addends.</p>
<p>Week 3 <u>Sight Words</u> has come his one</p> <p><u>Spelling Rime</u> <u>Pattern</u> -ook and -ump</p>	<p>Make a list of as many words that you can come up with that rhyme with "same".</p> <p>Write the sight words for this week.</p>	<p>Solve the word problem using UPS check. Explain your thinking to your parents.</p>	<p>Circle the small words inside each larger word.</p>	<p>Can you find how many groups of tens and ones in each set? Write the number in the box.</p>
<p>Week 4 <u>Sight Words</u> of or let how</p> <p><u>Spelling Rime</u> <u>Pattern</u> -ast and -ame</p>	<p>List 4 words that contain the -ake chunk and 4 words that contain the -ike chunk. Write a complete sentence using as many of your chunk words as you can.</p>	<p>Name the four zones of the ocean.</p> <p>Compare the numbers using the symbols <, >, or =.</p>	<p>Write three things you do when you get ready in the mornings. Put them in order from what takes least time to most time.</p>	<p>Use the word bank to name the coins. Write how much each coin is worth underneath. Write the times on the clocks.</p>

Monday

What are three body of waters on earth? Draw a picture of each.



Handwriting practice lines consisting of a solid top line, a dashed middle line, and a solid bottom line.



Handwriting practice lines for the word 'gas'.



Handwriting practice lines for the word 'flag'.

Tuesday



Handwriting practice lines for the word 'map'.



Handwriting practice lines for the word 'tent'.



Handwriting practice lines for the word 'skate'.



Handwriting practice lines for the word 'dog'.



Handwriting practice lines for the word 'lock'.



Handwriting practice lines for the word 'girl'.



Handwriting practice lines for the word 'fox'.



Handwriting practice lines for the word 'plane'.



Handwriting practice lines for the word 'crib'.

a

e

i

o

u

Wednesday




Solve the problem using UPS check.

There are 8 snowmen in front of the house. The kids made 3 more snowmen. How many snowmen are in front of the house?

Thursday

Handwriting practice lines for Thursday, consisting of multiple sets of solid top and bottom lines with a dashed midline.

Monday



Greatest

Least

Tuesday

Wednesday

the principal's Name is mrs. ellis

i Love living in texas

You are A good friend

Thursday

Solve the number sentences.

$7 + 6 = \underline{\quad}$ $8 + 9 = \underline{\quad}$ $8 + 4 = \underline{\quad}$ $7 + 9 = \underline{\quad}$

$8 - 6 = \underline{\quad}$ $9 + 9 = \underline{\quad}$ $4 - 2 = \underline{\quad}$ $4 + 5 = \underline{\quad}$

Find the missing addends.

$5 + \underline{\quad} = 9$ $\underline{\quad} + 6 = 12$ $10 + \underline{\quad} = 11$ $8 + \underline{\quad} = 10$

$\underline{\quad} + 4 = 7$ $\underline{\quad} + 6 = 11$ $\underline{\quad} + 4 = 8$ $12 + \underline{\quad} = 14$

Make a list of words that rhyme with

Monday

_____	_____	_____
-----	-----	-----
_____	_____	_____
-----	-----	-----
_____	_____	_____

Tuesday

Solve this word problem.

Carroll Elementary has 9 trees and 4 bushes. How many more trees are there than bushes? Show your work with a math sentence.

Wednesday

seed

they

didn't

forgot

Circle the small word in each larger word. Write the small word on the line.


going

this

plant

Thursday

Can you find how many groups of tens and ones in each set? Write the number in the box.



Monday

List 4 words that contain the -ake chunk and 4 words that contain the -ike chunk. Write a complete sentence using as many of your chunk words as you can.

Tuesday

Name the 4 zones of the ocean.

_____	_____
-----	-----
_____	_____
-----	-----
_____	_____

Use the math symbols $>$, $<$, or $=$ to compare the numbers.

$>$ greater than, $<$ less than, $=$ equals

121	136
-----	-----

82	100
----	-----

24	31
----	----

121	112
-----	-----

100	99
-----	----

71	71
----	----

Wednesday

Write three things you do when you get ready in the mornings. Put them in order from what takes least time to most time.

quarter



_____ ¢

dime



_____ ¢

nickel



_____ ¢

penny



_____ ¢

Thursday

Write the time on the clocks.

1.



2.